

Part 7 Assignment

1) Red buoys are marked with _____ numbers while green buoys are marked with _____ numbers.

even

odd

2) When returning from the ocean to a harbor or port, to stay in the channel, boats should keep the _____ buoys on their right or starboard side and keep the _____ buoys on their left or port side.

red

green

3) When heading to the ocean from a harbor or port, to stay in the channel, boats should keep the _____ buoys on their right or starboard side and keep the _____ buoys on their left or port side.

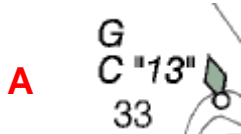
green

red

4) As you return to a port or harbor, buoys are numbered in increasing order. (True or False)

true

5) Below are 5 ATONS as shown on a chart. Match the ATON to the correct description by entering the letter of the ATON on the line next to the correct description of that ATON.



D

1 Red Buoy #16 Flashing Red Every 4 Seconds

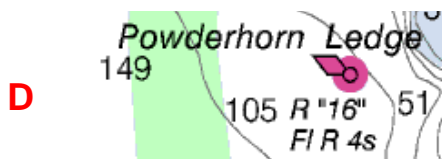


F

2 Green Daymark #7 Flashing Green Every 4 Seconds Mounted 24' High Visible to 4 Miles

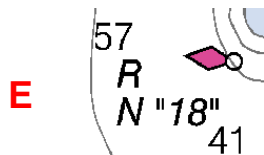


3 Red Nun #10 Flashing Red Every 4 Seconds



A

4 Green Can #13



B

5 Red Daymark #2



5 Green Daymark #4 Flashing Green Every 4 Seconds Mounted 12' High

C

6 Green Bell Buoy #17

E

7 Red Nun #18